

















"Children Helping Children"

Shape up Number Puzzle Each of the different shapes below has a numerical value. The numbers to the right of the grid are the sum of each row and the numbers at the bottom are the sum of each column. Can you work out the value of each shape? No shape has a value less than 1. Enter the solution into the empty grid.

				10
				11
				10
				10

7 12 10 12

1	3	4	2	10
1	4	3	3	11
2	4	1	3	10
3	1	2	4	10

7 12 10 12